


Counting On!

Name _____

Directions: Cut out the numbers at the bottom of the page. "Count on" to solve each addition problem. Glue the numbers in the correct place.

3

+



=

4


+



=

5

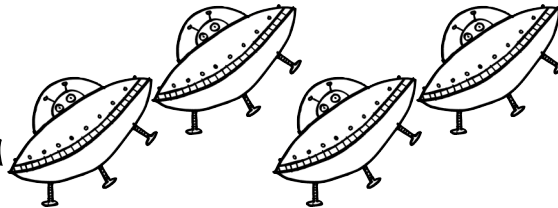
+



=

6

+



=

7

+



=

K.CC.2, K.OA.1, I.OA.5, & I.OA.6 Teacher Tam 2012



10

10

6








7

7

Counting Stars

Name _____

Directions: Cut out the numbers at the bottom of the page. Count the stars in each group. Glue the numbers in the correct place. Write each number.

	Glue it. 	Write it. 
		
		
		
		
		

K.CC.3, K.CC.4, & K.CC.5 Teacher Tam 2012 

5	10	3	6	8
---	----	---	---	---

Counting One More

Name _____

Directions: Cut out the numbers at the bottom of the page. Glue each number in the box where it belongs.


You have **4**. One more is

You have **5**. One more is

You have **7**. One more is

You have **8**. One more is

You have **9**. One more is





Teacher Tam 2012 
K.CC.4

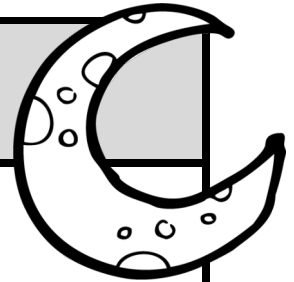
9	5	10	6	8
---	---	----	---	---


Drawing Moons

Name _____

Directions: Cut out the numbers at the bottom of the page. Glue the numbers **IN ORDER** from smallest to largest. Draw the correct number of moons to match each number.

Glue it. 	Draw it. 







Teacher Tam 2012 
K.CC.5

11	8	7	9	10
----	---	---	---	----

Equal Numbers of Aliens


Name _____

Directions: Cut out the groups of aliens at the bottom of the page. Find a group with the same number of aliens. Glue each group next to the group it matches.

	=	
	=	
	=	
	=	

Teacher Tam 2012 

K.CC.6



Making 10**Name** _____

Directions: Cut out the numbers at the bottom of the page. Glue them in the correct spaces to finish each number sentence. Use counters if you need them.

$2 + \boxed{} = 10$

$3 + \boxed{} = 10$

$1 + \boxed{} = 10$

$5 + \boxed{} = 10$

$4 + \boxed{} = 10$


$8 + \boxed{} = 10$

$7 + \boxed{} = 10$

$6 + \boxed{} = 10$

$0 + \boxed{} = 10$

$9 + \boxed{} = 10$



K.OA.3, K.OA.4, I.OA.6 & I.OA.8 Teacher Tam 2012 ☀


1	2	3	4	5
6	7	8	9	10

Subtracting Within 5

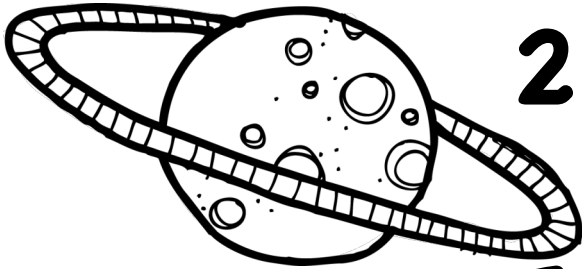
Name _____

Directions: Cut out the numbers at the bottom of the page. Glue them in the correct spaces to finish each number sentence.

$$3 - 1 =$$



$$4 - 2 =$$




$$2 - 1 =$$

$$5 - 3 =$$

$$4 - 1 =$$

$$3 - 2 =$$




K.OA.5 Teacher Tam 2012 

1	1	2	2	2	3
---	---	---	---	---	---

Tens and Ones**Name** _____

Directions: Cut out the blocks at the bottom of the page. Glue the correct amount of blocks in each space to "make" the number.

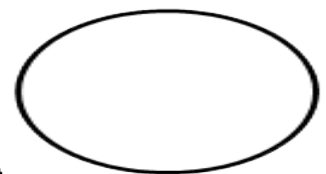
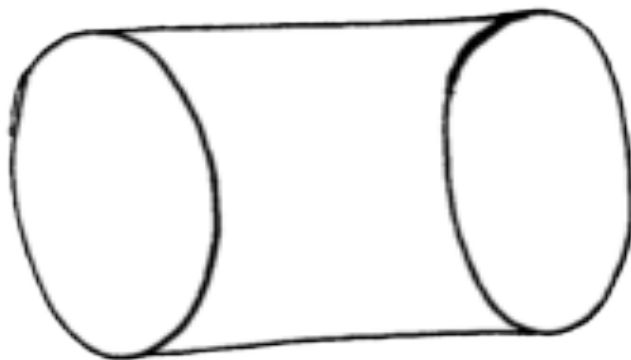
13**16****19****K.NBT.1 & I.NBT.2 Teacher Tam 2012**

Drawing With Shapes

Name _____

Directions: Cut out the shapes at the bottom of the page. Arrange the shapes and draw details to make the picture.

Make your own rocket. Use a cylinder for the body and a cone for the nose. Draw triangles on each side. Make a window with the oval. Draw circles for planets and add some stars.

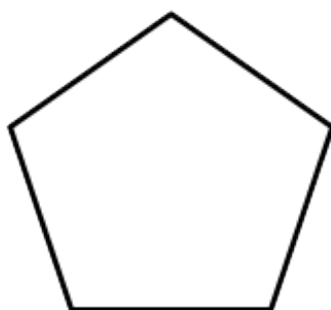



K.G.5 & I.G.2 Teacher Tam 2012 

Making Larger Shapes

Name _____

Directions: Cut out pentagon and triangles at the bottom of the page. Put them together to make a star.



K.G.6 & I.G.2 Teacher Tam 2012 

Counting On!

Name _____

Directions: Cut out the numbers at the bottom of the page. "Count on" to solve each addition problem. Glue each number in the correct space.

$$14 + \begin{array}{c} \text{spaceship} \\ \text{spaceship} \end{array} =$$

$$8 + \begin{array}{c} \text{alien} \\ \text{alien} \\ \text{alien} \end{array} =$$

$$10 + \begin{array}{c} \text{star} \\ \text{star} \\ \text{star} \\ \text{star} \end{array} =$$

$$9 + \begin{array}{c} \text{spaceship} \\ \text{spaceship} \\ \text{spaceship} \end{array} =$$

$$11 + \begin{array}{c} \text{alien} \\ \text{alien} \\ \text{alien} \\ \text{alien} \end{array} =$$

I.O.A.5 & I.O.A.6 2012 Teacher Tam





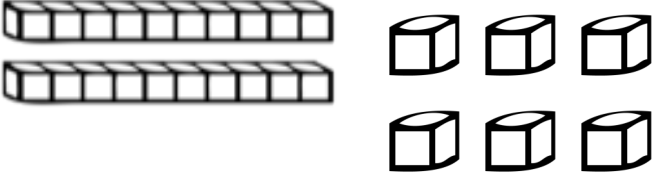
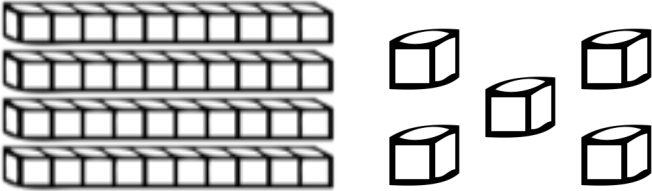
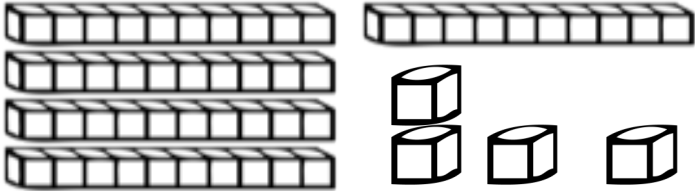


11	12	14	15	16
----	----	----	----	----

Counting Blocks

Name _____

Directions: Cut out the numbers at the bottom of the page. Count the blocks in each group. Glue the numbers in the correct space. Write each number.

	Glue it 	Write it. 
		
		
		
		
		

I.NBT.1 & I.NBT.2 Teacher Tam 2012 

41

26

14

45

54

Adding Ten More

Name _____

Directions: Cut out the numbers at the bottom of the page. Glue each number in the box where it belongs.

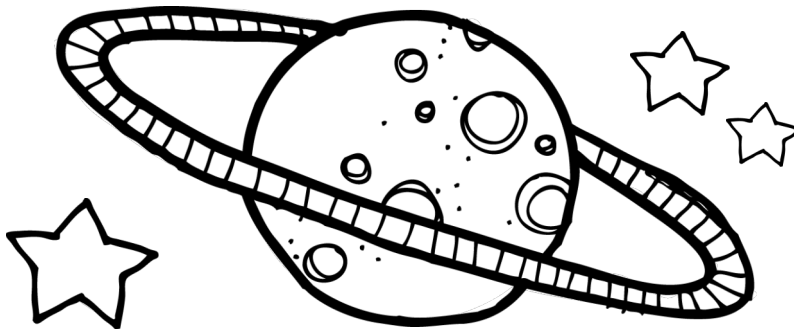
You have **25**. Ten more is

You have **16**. Ten more is

You have **42**. Ten more is

You have **63**. Ten more is

You have **31**. Ten more is



Teacher Tam 2012 
I.NBT.5

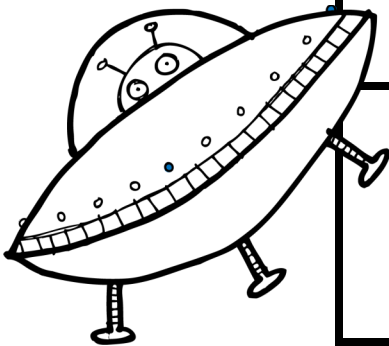

52**35****73****36****41****26**

Greater Than

Name _____

Directions: Cut out the numbers at the bottom of the page. Glue each one in a space on the left where it is **GREATER THAN** the number on the right.

>	12
>	15
>	18
>	28
>	33



Teacher Tam 2012 
I.NBT.3

42	14	16	20	30	11
----	----	----	----	----	----

Addition Word Problems

Name _____

Directions: Cut out the pictures at the bottom of the page. Use them to show how you solved each word problem. Write each number sentence.


In space, we saw 4 planets, 3 spaceships, and 5 stars. How many things did we see altogether?

+ + =

The astronaut saw 4 aliens. He saw 3 more yesterday and another 2 today. How many aliens did he see altogether?

+ + =

I.O.A.1 & I.O.A.2 Teacher Tam 2012




Addition**Name** _____

Directions: Cut out the numbers at the bottom of the page. Glue them in the correct spaces to finish each number sentence.

$$11 + 6 = \square$$



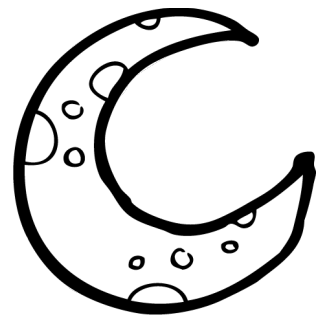
$$10 + \square = 15$$



$$13 + 7 = \square$$

$$8 + \square = 16$$

$$9 + 4 = \square$$



$$12 + \square = 15$$

I.OA.6 & I.OA.8 Teacher Tam 2012 

3

5

8

13

17

20

Subtraction

Name _____


7

Directions: Cut out the numbers at the bottom of the page. Glue them in the correct spaces to finish each number sentence.


$$13 - 4 =$$

$$12 -$$

$$= 8$$




$$- 3 = 9$$



$$19 - 4 =$$

$$17 -$$

$$= 7$$



$$- 7 = 10$$

I.OA.6 & I.OA.8 Teacher Tam 2012 

4

9

10

12

15


17

Tens and Ones


Name _____

Directions: Cut out the blocks at the bottom of the page. Glue the correct amount of blocks in each space to "make" the number.


29

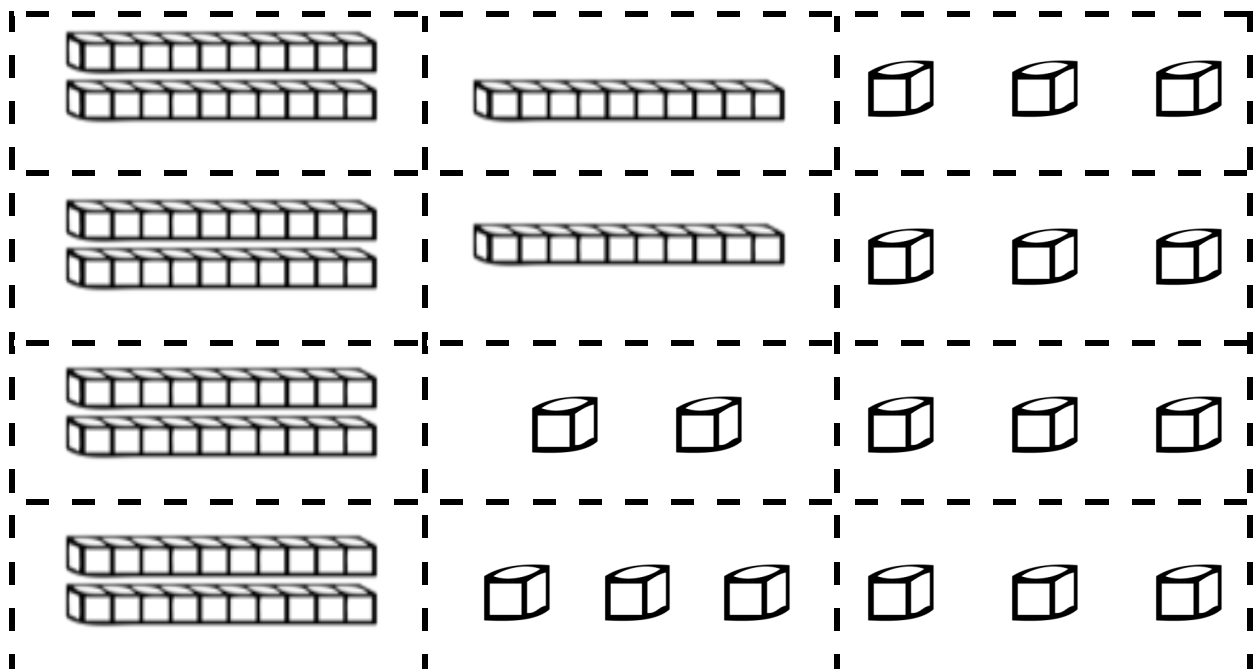
35



53



I.NBT.2 Teacher Tam 2012 




Graph It

Name _____

Directions: Cut out the pictures at the bottom of the page. Glue each object under the category where it belongs. Then, answer the questions at the bottom.

Space Pictures in Our Classroom



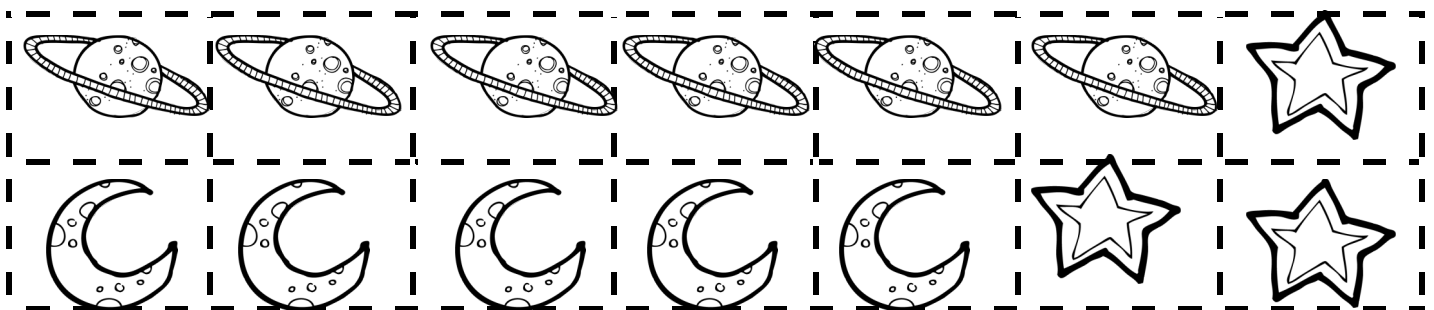
Planets	Moons	Stars

How many pictures do we have altogether? _____

Which kind of picture do we have the most of? _____

How many more moons do we have than stars? _____


I.MD.4 Teacher Tam 2012 




Measuring**Name** _____

Directions: Cut out the paper clips at the bottom of the page. Use them to measure each picture by gluing them end-to-end. Write each answer.

The alien is _____
paper clips tall.



The rocket is _____
paper clips tall.



1.MD.2 Teacher Tam 2012 ☀

